

Thursday 14 June 2012 – Morning

A2 GCE MATHEMATICS

4726 Further Pure Mathematics 2

QUESTION PAPER

Candidates answer on the Printed Answer Book.

OCR supplied materials:

- Printed Answer Book 4726
- List of Formulae (MF1)

Other materials required:

- Scientific or graphical calculator

Duration: 1 hour 30 minutes



INSTRUCTIONS TO CANDIDATES

These instructions are the same on the Printed Answer Book and the Question Paper.

- The Question Paper will be found in the centre of the Printed Answer Book.
- Write your name, centre number and candidate number in the spaces provided on the Printed Answer Book. Please write clearly and in capital letters.
- **Write your answer to each question in the space provided in the Printed Answer Book.** Additional paper may be used if necessary but you must clearly show your candidate number, centre number and question number(s).
- Use black ink. HB pencil may be used for graphs and diagrams only.
- Answer **all** the questions.
- Read each question carefully. Make sure you know what you have to do before starting your answer.
- Do **not** write in the bar codes.
- You are permitted to use a scientific or graphical calculator in this paper.
- Give non-exact numerical answers correct to 3 significant figures unless a different degree of accuracy is specified in the question or is clearly appropriate.

INFORMATION FOR CANDIDATES

This information is the same on the Printed Answer Book and the Question Paper.

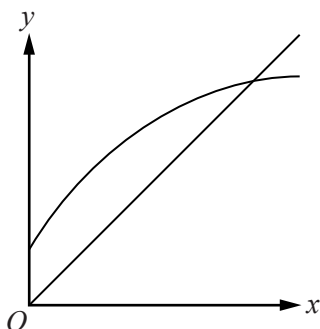
- The number of marks is given in brackets [] at the end of each question or part question on the Question Paper.
- **You are reminded of the need for clear presentation in your answers.**
- The total number of marks for this paper is **72**.
- The Printed Answer Book consists of **16** pages. The Question Paper consists of **8** pages. Any blank pages are indicated.

INSTRUCTION TO EXAMS OFFICER/INVIGILATOR

- Do not send this Question Paper for marking; it should be retained in the centre or recycled. Please contact OCR Copyright should you wish to re-use this document.

- 1 Express $\operatorname{sech} 2x$ in terms of exponentials and hence, by using the substitution $u = e^{2x}$, find $\int \operatorname{sech} 2x \, dx$. [5]
- 2 A curve has polar equation $r = \cos \theta \sin 2\theta$, for $0 \leq \theta \leq \frac{1}{2}\pi$. Find
- (i) the equations of the tangents at the pole, [2]
- (ii) the maximum value of r , [4]
- (iii) a cartesian equation of the curve, in a form not involving fractions. [3]
- 3 (i) By quoting results given in the List of Formulae (MF1), prove that $\tanh 2x \equiv \frac{2 \tanh x}{1 + \tanh^2 x}$. [2]
- (ii) Solve the equation $5 \tanh 2x = 1 + 6 \tanh x$, giving your answers in logarithmic form. [6]
- 4 It is given that the equation $x^4 - 2x - 1 = 0$ has only one positive root, α , and $1.3 < \alpha < 1.5$.

(i)



The diagram shows a sketch of $y = x$ and $y = \sqrt[4]{2x+1}$ for $x \geq 0$. Use the iteration $x_{n+1} = \sqrt[4]{2x_n + 1}$ with $x_1 = 1.35$ to find x_2 and x_3 , correct to 4 decimal places. On the copy of the diagram show how the iteration converges to α . [3]

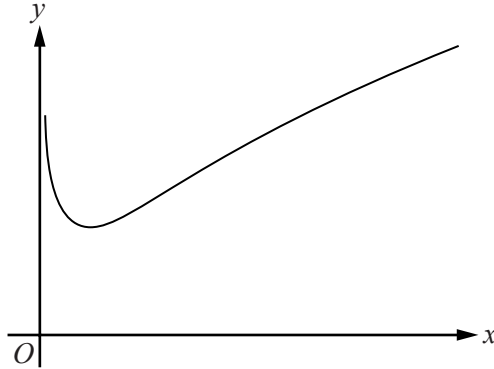
- (ii) For the same equation, the iteration $x_{n+1} = \frac{1}{2}(x_n^4 - 1)$ with $x_1 = 1.35$ gives $x_2 = 1.1608$ and $x_3 = 0.4077$, correct to 4 decimal places. Draw a sketch of $y = x$ and $y = \frac{1}{2}(x^4 - 1)$ for $x \geq 0$, and show how this iteration does not converge to α . [2]

- (iii) Find the positive root of the equation $x^4 - 2x - 1 = 0$ by using the Newton-Raphson method with $x_1 = 1.35$, giving the root correct to 4 decimal places. [4]

5 A function is defined by $f(x) = \sinh^{-1} x + \sinh^{-1} \left(\frac{1}{x}\right)$, for $x \neq 0$.

(i) When $x > 0$, show that the value of $f(x)$ for which $f'(x) = 0$ is $2 \ln(1 + \sqrt{2})$. [5]

(ii)



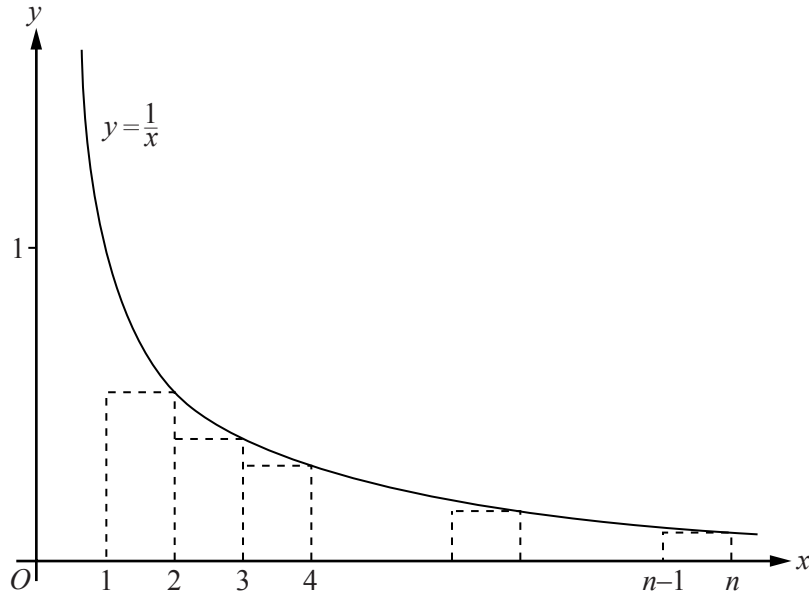
The diagram shows the graph of $y = f(x)$ for $x > 0$. Sketch the graph of $y = f(x)$ for $x < 0$ and state the range of values that $f(x)$ can take for $x \neq 0$. [3]

6 It is given that, for non-negative integers n ,

$$I_n = \int_0^\pi x^n \sin x \, dx.$$

(i) Prove that, for $n \geq 2$, $I_n = \pi^n - n(n-1)I_{n-2}$. [5]

(ii) Find I_5 in terms of π . [4]



The diagram shows the curve $y = \frac{1}{x}$ for $x > 0$ and a set of $(n - 1)$ rectangles of unit width below the curve. These rectangles can be used to obtain an inequality of the form

$$\frac{1}{a} + \frac{1}{a+1} + \frac{1}{a+2} + \dots + \frac{1}{b} < \int_1^n \frac{1}{x} dx.$$

Another set of rectangles can be used similarly to obtain

$$\int_1^n \frac{1}{x} dx < \frac{1}{c} + \frac{1}{c+1} + \frac{1}{c+2} + \dots + \frac{1}{d}.$$

(i) Write down the values of the constants a and c , and express b and d in terms of n . [3]

The function f is defined by $f(n) = 1 + \frac{1}{2} + \frac{1}{3} + \dots + \frac{1}{n} - \ln n$, for positive integers n .

(ii) Use your answers to part **(i)** to obtain upper and lower bounds for $f(n)$. [4]

(iii) By using the first 2 terms of the Maclaurin series for $\ln(1+x)$ show that, for large n ,

$$f(n+1) - f(n) \approx -\frac{n-1}{2n^2(n+1)}. \quad [5]$$

- 8 The curve C_1 has equation $y = \frac{p(x)}{q(x)}$, where $p(x)$ and $q(x)$ are polynomials of degree 2 and 1 respectively. The asymptotes of the curve are $x = -2$ and $y = \frac{1}{2}x + 1$, and the curve passes through the point $(-1, \frac{17}{2})$.

(i) Express the equation of C_1 in the form $y = \frac{p(x)}{q(x)}$. [4]

(ii) For the curve C_1 , find the range of values that y can take. [4]

Another curve, C_2 , has equation $y^2 = \frac{p(x)}{q(x)}$, where $p(x)$ and $q(x)$ are the polynomials found in part (i).

(iii) It is given that C_2 intersects the line $y = \frac{1}{2}x + 1$ exactly once. Find the coordinates of the point of intersection. [4]

BLANK PAGE

BLANK PAGE

THERE ARE NO QUESTIONS WRITTEN ON THIS PAGE.



Copyright Information

OCR is committed to seeking permission to reproduce all third-party content that it uses in its assessment materials. OCR has attempted to identify and contact all copyright holders whose work is used in this paper. To avoid the issue of disclosure of answer-related information to candidates, all copyright acknowledgements are reproduced in the OCR Copyright Acknowledgements Booklet. This is produced for each series of examinations and is freely available to download from our public website (www.ocr.org.uk) after the live examination series.

If OCR has unwittingly failed to correctly acknowledge or clear any third-party content in this assessment material, OCR will be happy to correct its mistake at the earliest possible opportunity.

For queries or further information please contact the Copyright Team, First Floor, 9 Hills Road, Cambridge CB2 1GE.

OCR is part of the Cambridge Assessment Group; Cambridge Assessment is the brand name of University of Cambridge Local Examinations Syndicate (UCLES), which is itself a department of the University of Cambridge.